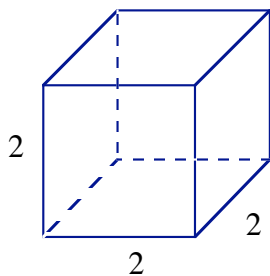


Chapter: 9 Area and Volume
Lesson: 9-2 Prisms and Pyramids
Classwork

name _____
date _____
period ____

Find the indicated measures of the following prisms.

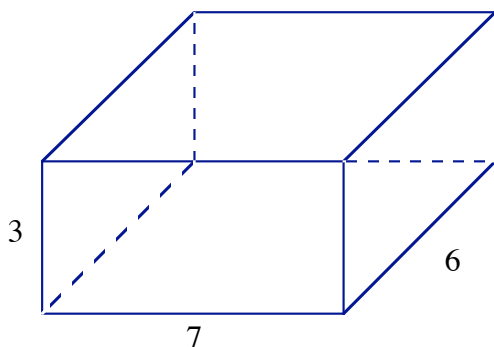
1.



S.A. = _____

V = _____

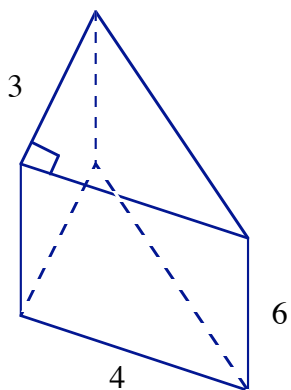
2.



S.A. = _____

V = _____

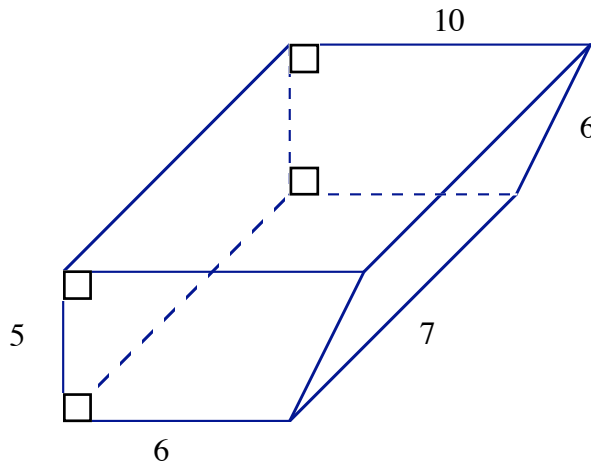
3.



L.A. = _____

S.A. = _____

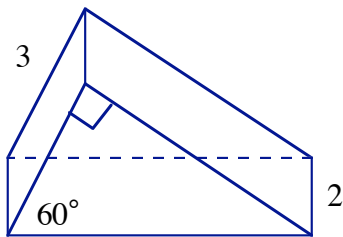
4.



L.A. = _____

V = _____

5.

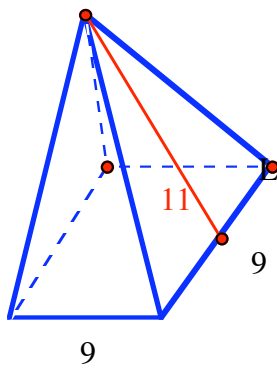


L.A. = _____

S.A. = _____

Find the indicated measure(s) of the following pyramids.

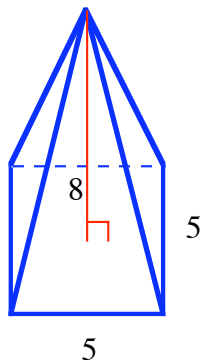
6.



L.A. = _____

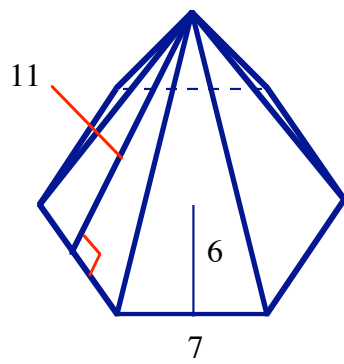
S.A. = _____

7.



V = _____

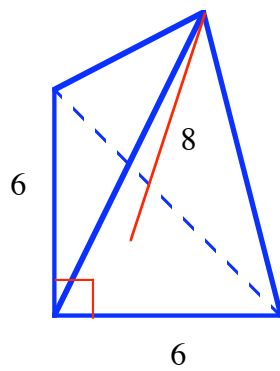
8.



$$L.A. = \underline{\hspace{2cm}}$$

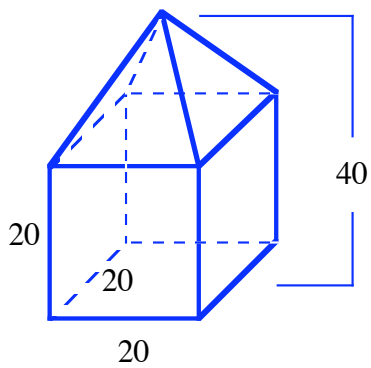
$$S.A. = \underline{\hspace{2cm}}$$

9.



$$V = \underline{\hspace{2cm}}$$

10.



$$V = \underline{\hspace{2cm}}$$